

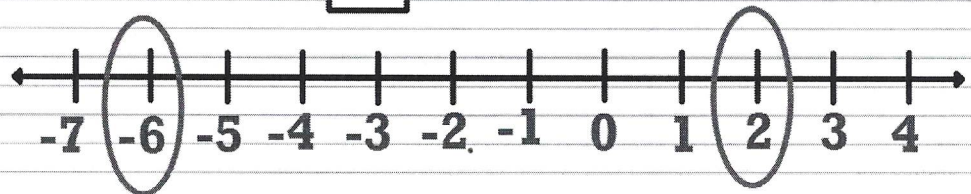
Chapter 6	Integers and the Coordinate Plane
Date:	6.2 Comparing and Ordering Integers
Essential Question	How can you use a number line to order real-life events?

Composition Book

6.2 Comparing and Ordering Integers

1) Compare 2 and -6 on a horizontal line.

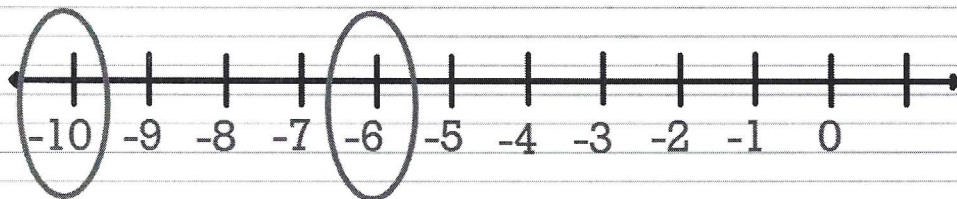
$$2 \boxed{>} -6$$



Complete number 1 on your notes page.

- 1) Compare -10 and -6 on a horizontal number line.

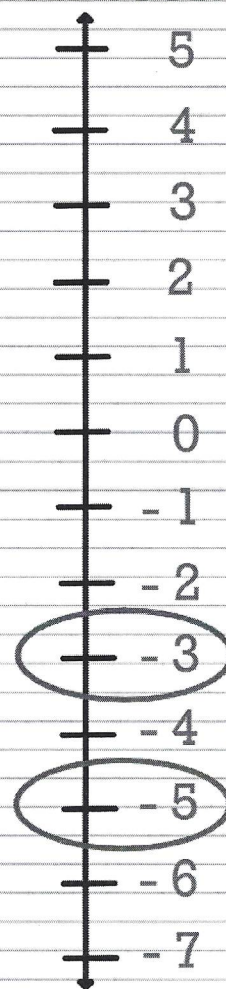
$$-10 \boxed{<} -6$$



Complete numbers 2 - 4 in your composition book.

2) Compare -5 and -3 on a vertical line.

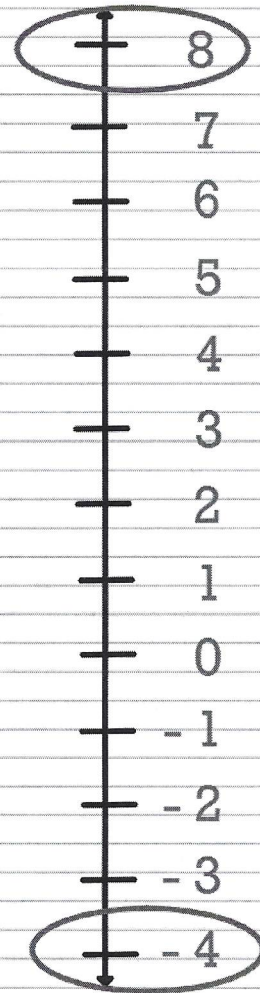
$$-5 \boxed{<} -3$$



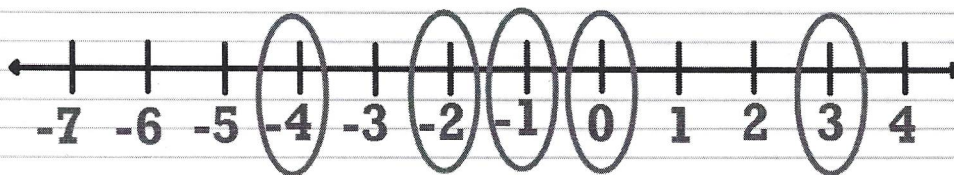
On your own

3) Compare 8 and -4 on a vertical number line.

$$8 \boxed{>} -4$$



- 4) Order -4, 3, 0, -1, -2 from least to greatest.
Place the integers on a number line to help you.



Least to Greatest -4, -2, -1, 0, 3